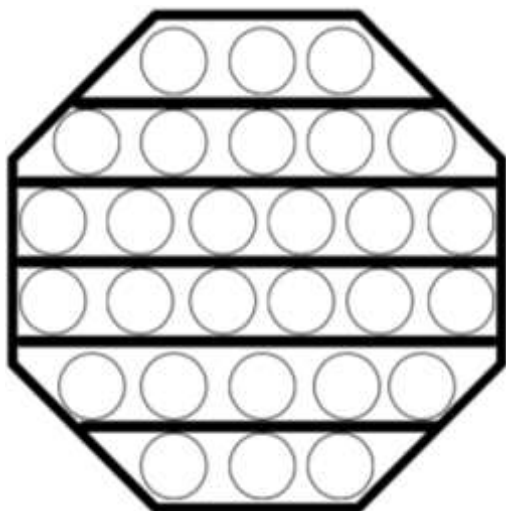
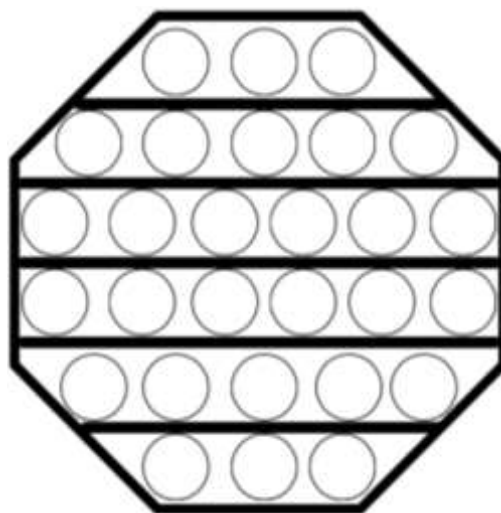


# POP IT- VAMOS SUBTRAIR?

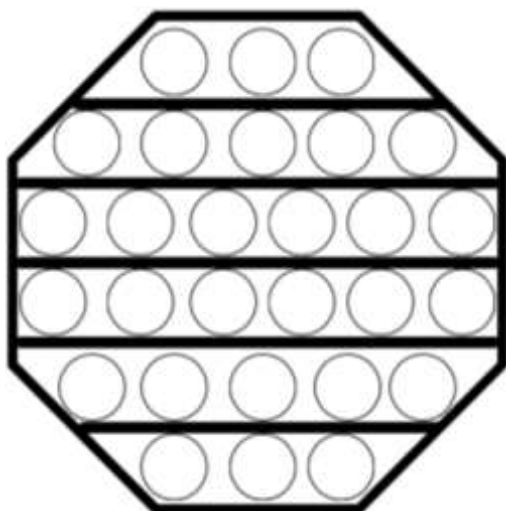
ESCOLHA UMA COR DE LÁPIS PARA REPRESENTAR O TOTAL. EM SEGUIDA, PASSE UM TRAÇO DE DIAGONAL EM CADA BOLINHA QUE DEVERÁ SUBTRAIR. CONTE AS QUE RESTARAM E ANOTE O RESULTADO.



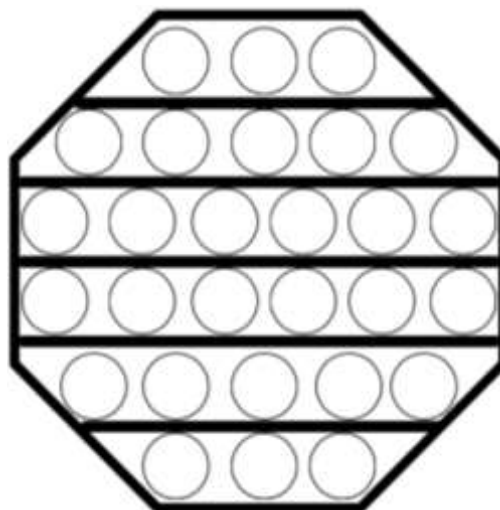
$$14 - 6 = \underline{\quad}$$



$$20 - 9 = \underline{\quad}$$



$$28 - 12 = \underline{\quad}$$



$$17 - 8 = \underline{\quad}$$



@professora.marciareis