



OPERAÇÕES COM O POP IT


RESOLVA AS OPERAÇÕES PINTANDO AS QUANTIDADES INDICADAS E OS RESULTADOS NO POP IT.



$$7 + 3 =$$



$$9 + 6 =$$




$$7 + 5 =$$



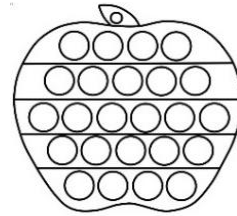
$$5 + 5 =$$




$$10 + 3 =$$



$$10 - 6 =$$




$$15 - 4 =$$



$$5 - 3 =$$



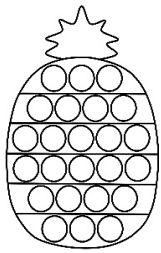
$$11 - 8 =$$



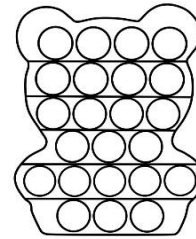
$$12 - 7 =$$

OPERAÇÕES COM O POP IT


RESOLVA AS OPERAÇÕES PINTANDO AS QUANTIDADES INDICADAS E OS RESULTADOS NO POP IT.



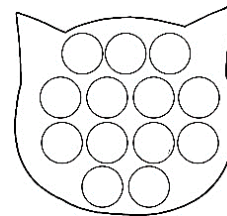
$$3 \times 3 =$$



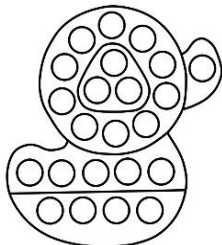
$$8 \div 2 =$$



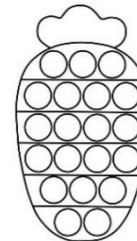
$$6 \times 2 =$$



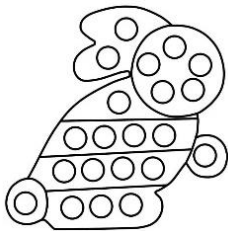
$$9 \div 3 =$$




$$3 \times 3 =$$



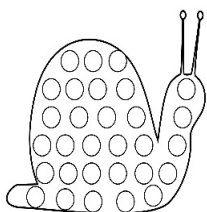
$$15 \div 3 =$$




$$4 \times 2 =$$



$$12 \div 2 =$$



$$5 \times 3 =$$



$$10 \div 2 =$$