


FOLCLORE



ATIVIDADES MATEMÁTICAS



COLOQUE EM ORDEM CRESCENTE E DECRESCENTE.



| CRESCENTE | DECRESCENTE |
|-----------|-------------|
| ----- | ----- |
| ----- | ----- |
| ----- | ----- |
| ----- | ----- |
| ----- | ----- |
| ----- | ----- |

COMPLETE COM ANTECESSOR E SUCESSOR DO NÚMERO EM DESTAQUE.

| | | |
|--|----|--|
| | 82 | |
|--|----|--|

| | | |
|--|----|--|
| | 50 | |
|--|----|--|

| | | |
|--|----|--|
| | 17 | |
|--|----|--|

| | | |
|--|----|--|
| | 27 | |
|--|----|--|

| | | |
|--|----|--|
| | 72 | |
|--|----|--|

| | | |
|--|----|--|
| | 21 | |
|--|----|--|

| | | |
|--|----|--|
| | 54 | |
|--|----|--|

| | | |
|--|----|--|
| | 72 | |
|--|----|--|

| | | |
|--|----|--|
| | 29 | |
|--|----|--|

| | | |
|--|----|--|
| | 60 | |
|--|----|--|

| | | |
|--|----|--|
| | 63 | |
|--|----|--|

| | | |
|--|----|--|
| | 12 | |
|--|----|--|

| | | |
|--|----|--|
| | 55 | |
|--|----|--|



| | | |
|--|----|--|
| | 98 | |
|--|----|--|

| | | |
|--|----|--|
| | 81 | |
|--|----|--|

| | | |
|--|----|--|
| | 86 | |
|--|----|--|

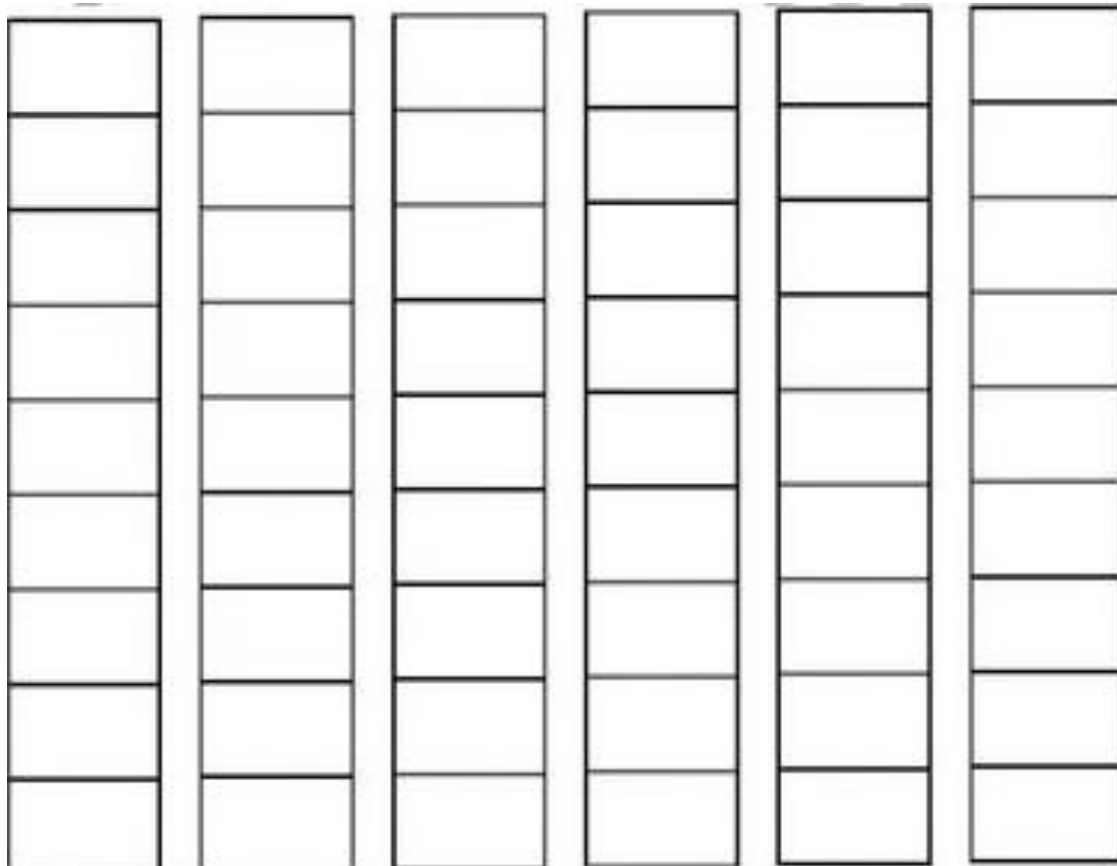


COMPLETE COM OS SINAIS DE (>) MAIOR, (<) MENOR OU (=) IGUAL.



GRÁFICO

LENDAS FOLCLÓRICAS PREFERIDAS PELOS ALUNOS.



APÓS OBSERVAR O GRÁFICO RESPONDA:

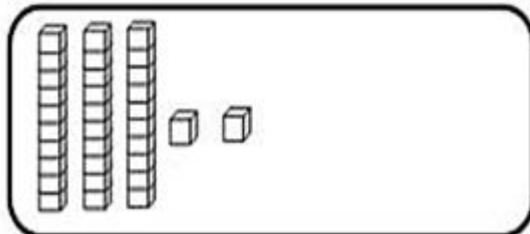
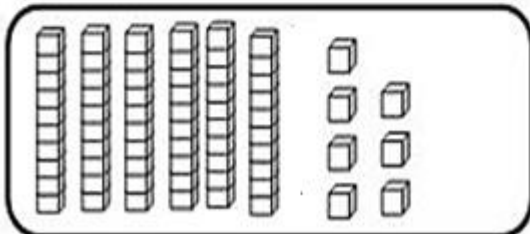
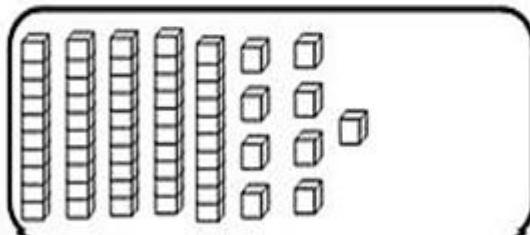
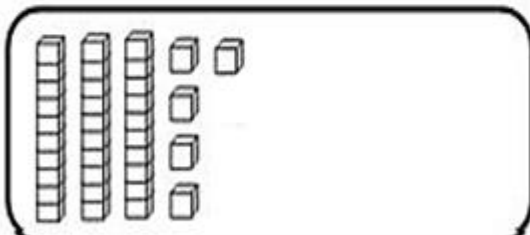
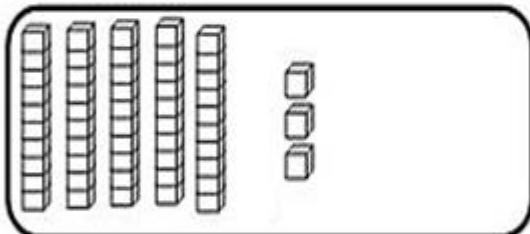
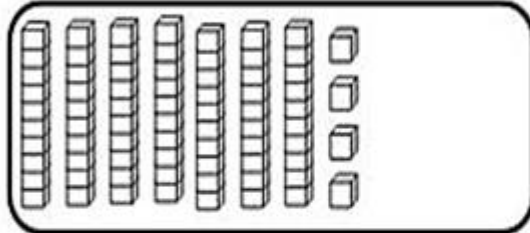
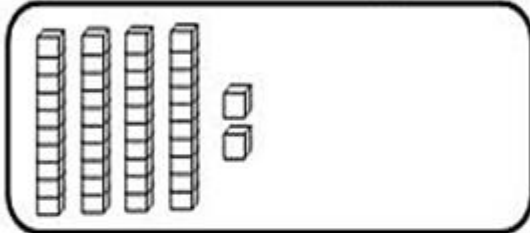
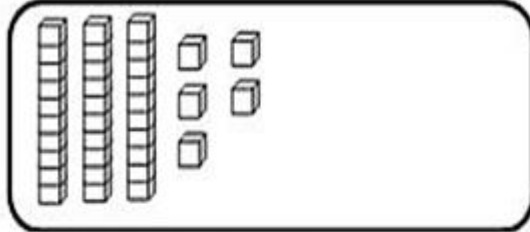
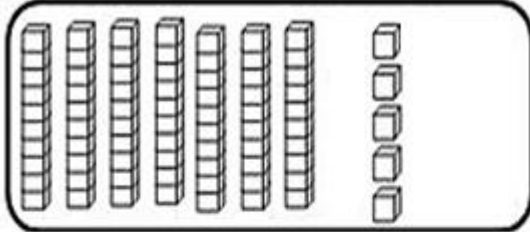
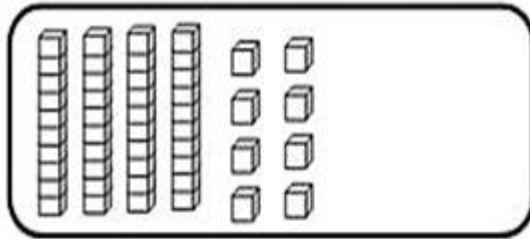
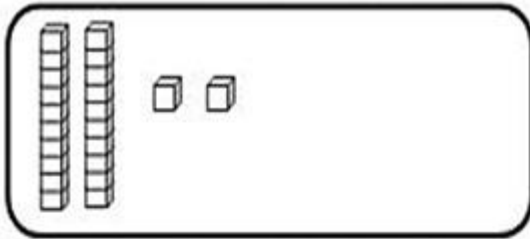
QUAL FOI A LENDA MAIS VOTADA?

QUAL FOI A LENDA MENOS VOTADA?

HOUVE ALGUMA LENDA COM A MESMA QUANTIDADE DE VOTOS? SE SIM, QUAL?

QUANTOS VOTOS O SACI TEVE A MAIS QUE O CURUPIRA?

COLOQUE O VALOR REPRESENTADO PELO MATERIAL DOURADO EM CADA QUADRINHO.



CALCULE:

$62 + 6 =$

| | |
|----------|----------|
| D | U |
| | |
| | |
| | |

$82 + 5 =$

| | |
|----------|----------|
| D | U |
| | |
| | |
| | |

$85 - 4 =$

| | |
|----------|----------|
| D | U |
| | |
| | |
| | |

$10 + 3 =$

| | |
|----------|----------|
| D | U |
| | |
| | |
| | |

$45 - 33 =$

| | |
|----------|----------|
| D | U |
| | |
| | |
| | |

$21 + 17 =$

| | |
|----------|----------|
| D | U |
| | |
| | |
| | |

$37 + 19 =$

| | |
|----------|----------|
| D | U |
| | |
| | |
| | |

$10 + 22 =$

| | |
|----------|----------|
| D | U |
| | |
| | |
| | |

$47 - 31 =$

| | |
|----------|----------|
| D | U |
| | |
| | |
| | |

$37 + 20 =$

| | |
|----------|----------|
| D | U |
| | |
| | |
| | |

$23 + 23 =$

| | |
|----------|----------|
| D | U |
| | |
| | |
| | |

$23 + 16 =$

| | |
|----------|----------|
| D | U |
| | |
| | |
| | |

